

BUDHA DAL PUBLIC SCHOOL, PATIALA
FINAL EXAMINATION (, MARCH 2025)

Subject- Maths

Class -1 Set- B

Name _____

Roll No. _____

Section _____

Time: 2hrs30min.

Maximum Marks: 60

Section-A

Very Short Answer Questions

13 M

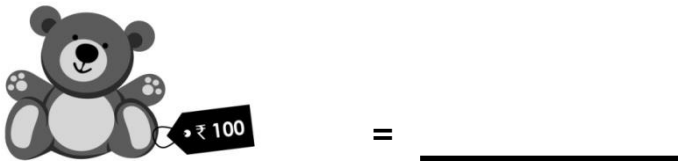
Answer the following:

1) How much is ₹10 + ₹10 + ₹10+ ₹10 = ₹_____ (1)

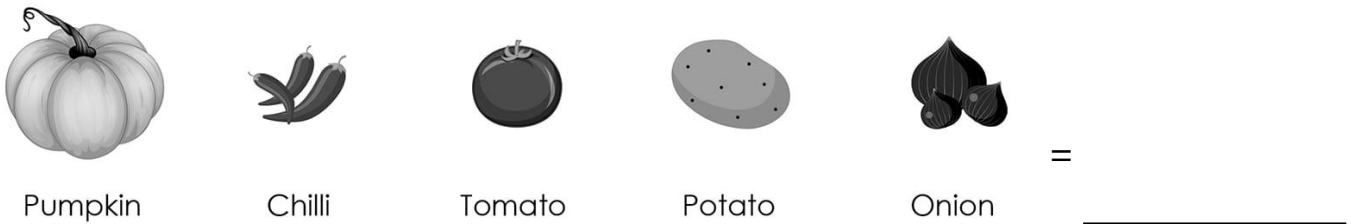
2) Find the total amount. (1)



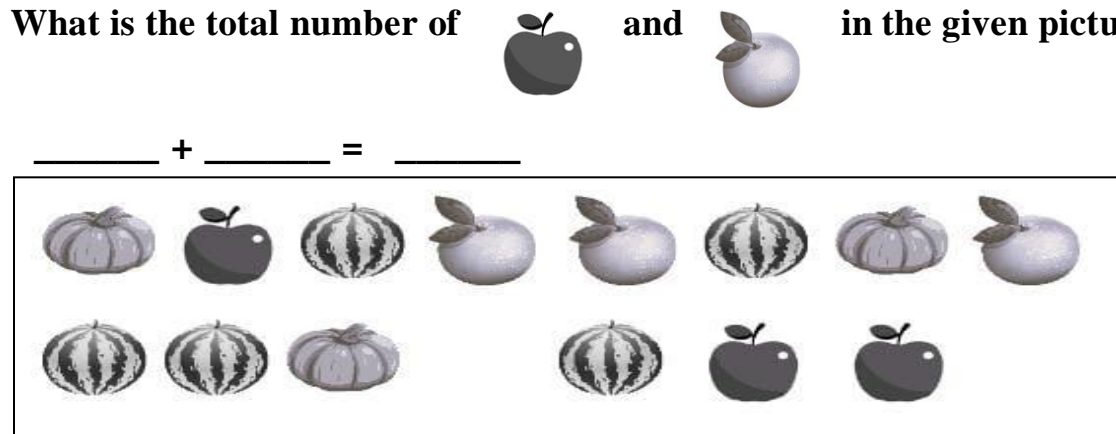
3) Write the price of the toy given. (1)




4) Which vegetable is the heaviest? (1)



5) What is the total number of _____ and _____ in the given picture? (1)



- 6) Kids with balls in the picture are crossed out. How many kids with other activities remain? (1)



- 7) In the given picture, tables with three items are crossed out. How many tables are left? (1)



= _____

Fill in the blanks:

- 8) $4 - 2 =$ _____ (1)
- 9) $₹20 + ₹10 = ₹$ _____ (1)
- 10) $₹ 3 + ₹ 4 = ₹$ _____ (1)
- 11) The notes and coins used to buy things are called _____. (1)
- 12) The lightest among the following is the _____. (1)



Feather



Book



Comb



Table

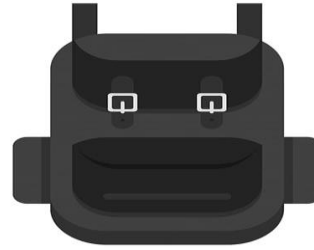


Bag

- 13) Among the given things, the pencil box is _____
(lighter/heavier) than the backpack. (1)



pencil box











backpack

Section-B**Graphic Organisers****11 M**

Answer the following:

- 14) Tick the object which is heavier than the other. (4)

 bag <input type="checkbox"/>	 pen <input type="checkbox"/>
<div style="display: flex; justify-content: space-around; align-items: center;"> <div style="text-align: center;">↑ ↓</div> <div style="border: 1px solid black; padding: 5px;">Heavier</div> <div style="text-align: center;">↑ ↓</div> </div>	
 mobile <input type="checkbox"/>	 cupboard <input type="checkbox"/>
 shirt <input type="checkbox"/>	 paper pin <input type="checkbox"/>
 grapes <input type="checkbox"/>	 pumpkin <input type="checkbox"/>

- 15) Subtract vertically. (4)

Subtract																																			
<table border="1" style="width: 100%; text-align: center;"> <tr><th>T</th><th>O</th></tr> <tr><td>8</td><td>3</td></tr> <tr><td>- 7</td><td>1</td></tr> <tr><td>1</td><td></td></tr> </table>	T	O	8	3	- 7	1	1		<table border="1" style="width: 100%; text-align: center;"> <tr><th>T</th><th>O</th></tr> <tr><td>7</td><td>7</td></tr> <tr><td>- 2</td><td>3</td></tr> <tr><td>5</td><td></td></tr> </table>	T	O	7	7	- 2	3	5		<table border="1" style="width: 100%; text-align: center;"> <tr><th>T</th><th>O</th></tr> <tr><td>9</td><td>5</td></tr> <tr><td>- 6</td><td>3</td></tr> <tr><td>3</td><td></td></tr> </table>	T	O	9	5	- 6	3	3		<table border="1" style="width: 100%; text-align: center;"> <tr><th>T</th><th>O</th></tr> <tr><td>5</td><td>8</td></tr> <tr><td>- 2</td><td>6</td></tr> <tr><td>3</td><td></td></tr> </table>	T	O	5	8	- 2	6	3	
T	O																																		
8	3																																		
- 7	1																																		
1																																			
T	O																																		
7	7																																		
- 2	3																																		
5																																			
T	O																																		
9	5																																		
- 6	3																																		
3																																			
T	O																																		
5	8																																		
- 2	6																																		
3																																			

20) ₹ 8 + ₹ 2 = _____

(1)

A. ₹ 82


C. ₹ 28

B. ₹ 6

D. ₹ 10

21) Identify the collection in the picture.

(1)



A. A collection of books

C. A collection of balloons

B. A collection of balls

D. A collection of shoes

22) How much does 2 coins of ₹5 make?

(1)

A. ₹ 20

C. ₹ 10

B. ₹ 30

D. ₹ 25

23) What is the difference between 9 and 3?

(1)

A. 6

C. 2

B. 4

D. 7

24) Identify the lightest bird among the following.

(1)

A.



C.



B.



D.



25) Which of the following coins has the least value? (1)

A.



C.



B.



D.



= _____

26) Which vehicle is the lightest? (1)

A.



C.



B.



D.



Section-C

Short Answer Questions

26 M

27) Subtract 55 from 97 using vertical subtraction. (2)

	T	O
—		

28) Subtract 3 from 7 using the number line. (2)




So, _____ - _____ = _____

29) Order the following from the lightest to the heaviest. Write 1 for the lightest and 3 for the heaviest. (3)

a)



b)



30) Fill in the blanks with heavier/lighter. (2)

a)



The wheat sack is _____ than the leaf.

b)



The ice cream is _____ than the brick.

31) Measure the given items using cubits: (2)

	Object	Number of cubits
a)		_____ cubits
b)		_____ cubits

32) Subtract the following.

(4)

a) $8 - 5$

O

b) $5 - 4$

O

33) The money that Kamal and Rohan have is shown below. How much money does each of them have? Who has more money? (3)

Kamal:



+



+



+



= _____

Rohan:



+



= _____

34) There are total 64 students in a class. If there are 44 boys, find the number of girl in the class? (4)

Solution:

Total number of students = _____

Number of students in boys = _____

Number of students in girls = _____ - _____

So, there are _____ girls in the class.

T	O

35) Ram baked 65 cookies for his shop. If he sold 42 cookies, how many cookies were left with him? (4)

Solution:

Number of cookies with Ram = _____

Number of cookies Ram sold = _____

Number of cookies left with Ram = _____ - _____

Therefore, Jack has _____ cookies left.

T	O